

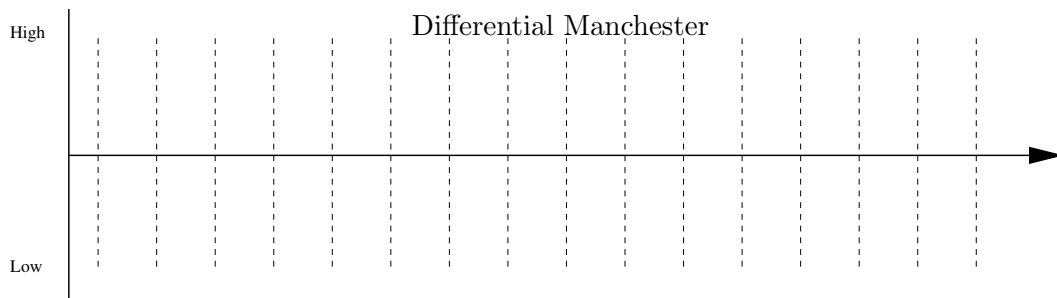
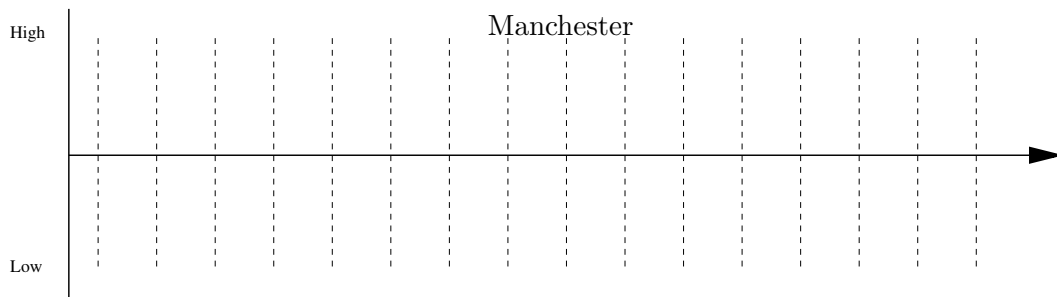
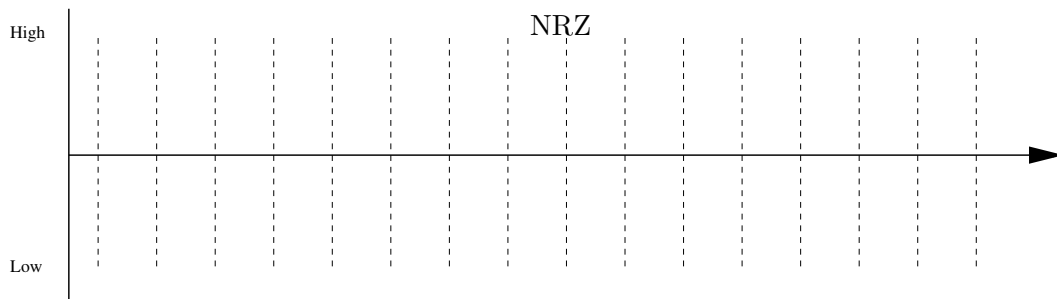
Tutorial Test on Lectures 1 to 6 - version (sample)

Student Name:

Student ID Number:

This test contains seven questions, which have a total of 70 marks. It is worth 7% of your final mark. You should answer all questions. Please show your working in order to get full marks.

1. (9 marks) Draw the digital signals for the bit string 010 101 111 000 011 using each of the NRZ, Manchester, and differential Manchester digital encoding schemes. Assume a high value represents the quiescent state (no data transmitted). Include the bits sent under each encoding diagram.



2. (a) (10 marks) Compress the following bit stream using run length encoding.

Use 5 bits to code each run length (put a space after every 5th bit). Parenthesized expressions indicate runs. There are a total of 148 bits in this data.

1 (36 zeroes) 1 (23 zeroes) 111 (48 zeroes) 1 (31 zeroes) 1 (3 zeroes)

- (b) (1 mark) Express the length of the compressed stream as a fraction of the original.
Do not simplify the fraction.

3. Using the following Huffman code:

Letter	Code
A	01
B	110
C	111
D	10
E	00

(a) (*3 marks*) Interpret this bit stream starting from the leftmost bit. Spaces are not significant.

0100 1101 1100 1100 1110 0100 1011 0111 111

(b) (*3 marks*) Encode the following character string. Put a space after every fourth bit.

A B E D C E D B A C

4. (12 marks) Design a Huffman code for the text

A B C E D C A A A B D D D D E B A A A A C D A A A A

so that the Huffman code representation is the shortest possible.

Note: When merging two trees always put the one with the lightest weight on the left-hand side. If weights are equal use alphabetic order.

5. (12 marks) Suppose you want to transmit the data, 1001 1100 101, and the generator polynomial is $x^6 + x^3 + 1$. What bit string is actually sent? (Put a space after every fourth bit.)

6. (8 marks) Assume a sender has the following data to send:

Frame Number	Data
1	10001110
2	01010110

Construct the Hamming code for each frame and show what is actually sent.

